

NOM: _____

1- RECONeix TOTS ELS NÚMEROS DEL 0 AL 10:


4 6 2 0 8 3 7 9 10 1 5

2- ESCRIU TOTS ELS NÚMEROS DEL 0 AL 10 (dictats per ordre, miram el traç i poden copiar)

• • • • • • • • • • •

3- COMPTA OBJECTES FINS A: _____

4- COMPTA I ESCRIU ELS NOMBRES (no cal mirar el traç):




















5- SUMES:

$$\begin{array}{r} 2 \\ +2 \\ \hline \end{array}$$

$2 + 5 =$

$$\begin{array}{r} 4 \\ +4 \\ \hline \end{array}$$

$3 + 2 =$

$$\begin{array}{r} 6 \\ +1 \\ \hline \end{array}$$

$1 + 9 =$

$$\begin{array}{r} 7 \\ +2 \\ \hline \end{array}$$

$8 + 0 =$

6- RESOL ORALMENT:

“NA MARIA TÉ 2 PILOTES I EN PEP LI REGALA 3 PILOTES. QUANTES PILOTES TÉ ARA?”




7- SERIACIONS:

DE 2 ATRIBUTS _____

DE 3 ATRIBUTS _____

DE 4 ATRIBUTS _____



8- RECONEIX (consigna: quin és el quadrat?...)




9- REALITZA LES FIGURES GEOMÈTRIQUES: (consigna: dibuixa el quadrat)




10- ANOMENA LES FIGURES GEOMÈTRIQUES? (anomenar correctament les figures geomètriques de l'exercici 8 i posar el nombre de les figures anomenades) _____.

11- CONCEPTES QUANTIFICADORS BÀSICS:

| MOLTS – POCS - CAP | | |
|---|--|--|
|  | |  |


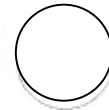
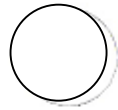

| IGUAL - DIFERENT |
|---|
|  |

12- COMPARAR QUANTITATS:

| DIBUIXA MÉS QUE..... | DIBUIXA MENYS QUE..... |
|--|--|
|  |  |
| DIBUIXA IGUAL QUE..... | |
|  | |

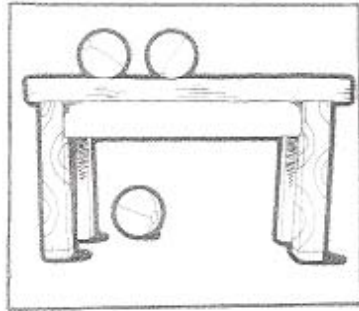
13- DIU ELS DIES DE LA SETMANA? (no es tindrà en compte l'ordre) _____

14- ORDENA TEMPORALMENT:




15- CONCEPTES ESPACIALS (es diu la consigna):


DAMUNT - DAVALL




A PROP - LLUNY



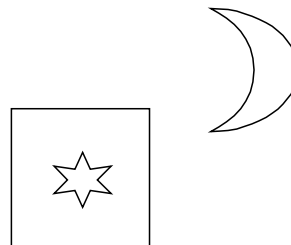
A DALT - A BAIX




UN COSTAT - L'ALTRE




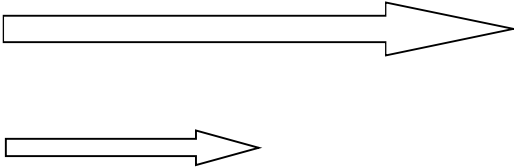

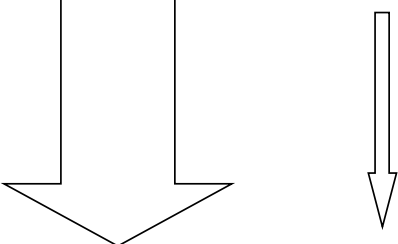
DINS - FORA



DAVANT - DARRERA



16- CONCEPTES DE MESURA (es diu la consigna):

| | |
|---|---|
| <p>PETIT - MITJÀ - GRAN</p>  | <p>LLARG - CURT</p>  |
| <p>ALT - BAIX</p>  | <p>GRUIXAT - PRIM</p>  |